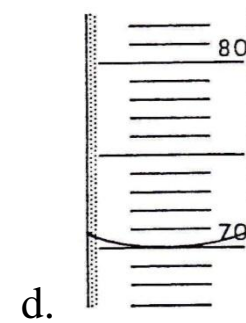
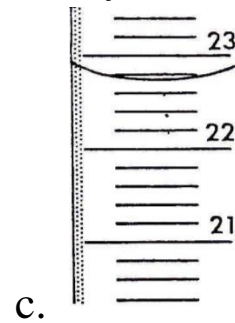
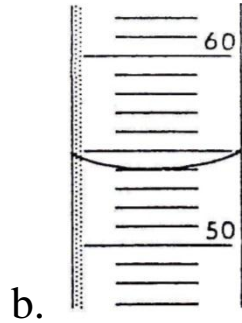
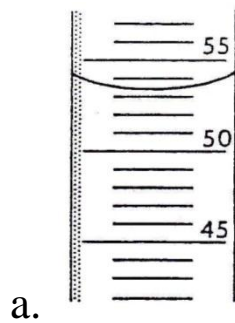


Measurements

1. All measurements possess a certain degree of _____ or error.
2. Error begins with the experimenter making the measurement with a specific tool or instrument. _____ digits are indicated by the markings on the tool, whereas the space between markings gives the _____ digit.
3. What volume is indicated on each of the graduated cylinders below?



4. What mass is indicated on each of the balances below?

